

1. Pluss og minus

/ 12

$$\underline{15} + \underline{12} = \underline{\quad}$$

$$\underline{12} + \underline{9} = \underline{\quad}$$

$$\underline{10} + \underline{11} = \underline{\quad}$$

$$\underline{12} + \underline{17} = \underline{\quad}$$

$$\underline{14} - \underline{4} = \underline{\quad}$$

$$\underline{10} - \underline{7} = \underline{\quad}$$

$$\underline{11} + \underline{16} = \underline{\quad}$$

$$\underline{13} - \underline{10} = \underline{\quad}$$

$$\underline{16} - \underline{5} = \underline{\quad}$$





$$\underline{10} + \underline{10} = \underline{\quad}$$

$$\underline{21} + \underline{13} = \underline{\quad}$$

$$\underline{15} - \underline{11} = \underline{\quad}$$

1. Hvussu nógv kosta ísarnir?

/ 4



3. Klokkan?

/ 3




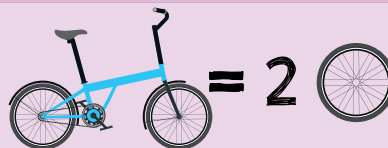
_____ : _____

_____ : _____

_____ : _____

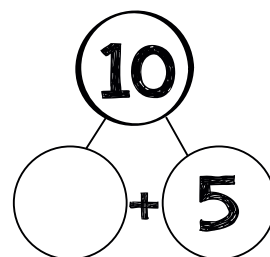
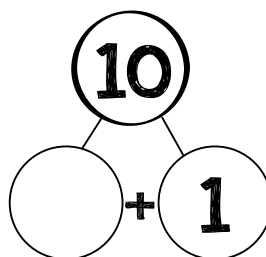
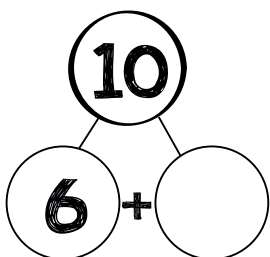
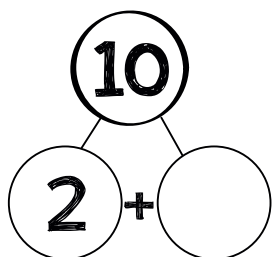
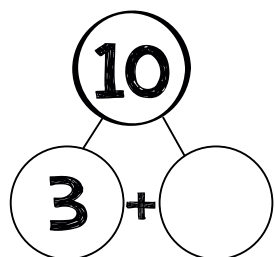
4. Súkklu-rokning

/ 1



5. Tíggju-talsvinir

/ 4



1 1 1 1 1

2 2 2 2 2

3 3 3 3 3

4 4 4 4 4

5 5 5 5 5

6 6 6 6 6

7 7 7 7 7

8 8 8 8 8

9 9 9 9 9

0 0 0 0 0