

## 1. Pluss og minus

/  12

$12 + 6 = \underline{\quad}$

$11 + 12 = \underline{\quad}$

$15 + 14 = \underline{\quad}$

$18 + 21 = \underline{\quad}$

$34 - 7 = \underline{\quad}$

$24 - 10 = \underline{\quad}$

$23 + 25 = \underline{\quad}$

$25 - 12 = \underline{\quad}$

$38 - 11 = \underline{\quad}$



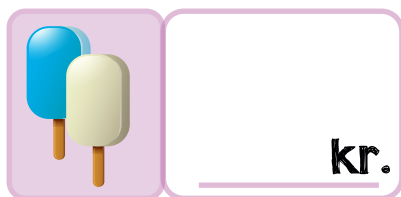


$22 + 22 = \underline{\quad}$

$41 + 18 = \underline{\quad}$

$40 - 24 = \underline{\quad}$



## 2. Hvussu nógv kostar ísarnir?

/  4



## 3. Klokkan?

/  3



## 4. Tekst uppgáva

/  1

Durita hevði bakað 14 smákøkur. Birna át 9 smákøkur frá Duritu.

Hvussu nógvur smákøkur hevði Durita eftir?

Ger saman við einum vaksnum

\_\_\_\_\_

## 5. Tíggju-talsvinir

/  4

størri

143

1

størri

114

10

størri

266

100

størri

213

1

størri

412

10

størri

352

100

1 1 1 1 1 . . . .

2 2 2 2 2 . . . .

3 3 3 3 3 . . . .

4 4 4 4 4 . . . .

5 5 5 5 5 . . . .

6 6 6 6 6 . . . .

7 7 7 7 7 . . . .

8 8 8 8 8 . . . .

9 9 9 9 9 . . . .

0 0 0 0 0 . . . .